
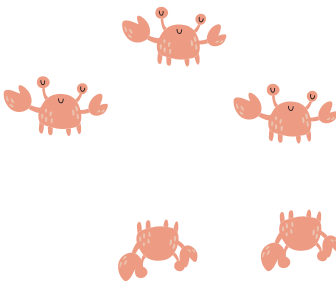








# חיסור

רשמו כמה סרטנים נותרו לאחר שחלק קפצו למים


$$\begin{array}{r} 5 \\ - 1 \\ \hline \\ \hline \end{array}$$

$$\begin{array}{r} 5 \\ - 2 \\ \hline \\ \hline \end{array}$$

$$\begin{array}{r} 5 \\ - 3 \\ \hline \\ \hline \end{array}$$

$$\begin{array}{r} 3 \\ - 1 \\ \hline \\ \hline \end{array}$$

$$\begin{array}{r} 4 \\ - 2 \\ \hline \\ \hline \end{array}$$

$$\begin{array}{r} 3 \\ - 2 \\ \hline \\ \hline \end{array}$$

$$\begin{array}{r} 2 \\ - 1 \\ \hline \\ \hline \end{array}$$

$$\begin{array}{r} 4 \\ - 1 \\ \hline \\ \hline \end{array}$$